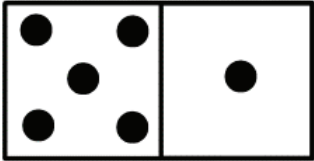
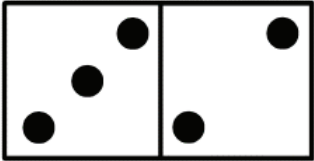

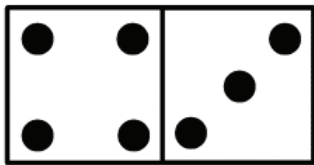


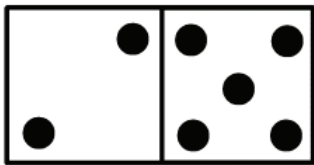
Count the number of dots on each domino and fill in the total.

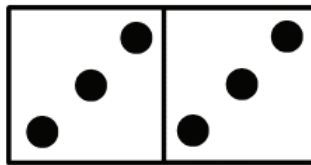
1)   
 \_\_\_ + \_\_\_ = \_\_\_


2)   
 \_\_\_ + \_\_\_ = \_\_\_

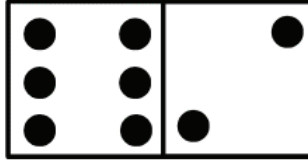
3)   
 \_\_\_ + \_\_\_ = \_\_\_


4)   
 \_\_\_ + \_\_\_ = \_\_\_


5)   
 \_\_\_ + \_\_\_ = \_\_\_


6)   
 \_\_\_ + \_\_\_ = \_\_\_


7)   
 \_\_\_ + \_\_\_ = \_\_\_

8)   
 \_\_\_ + \_\_\_ = \_\_\_

9)   
 \_\_\_ + \_\_\_ = \_\_\_

10)   
 \_\_\_ + \_\_\_ = \_\_\_

11)   
 \_\_\_ + \_\_\_ = \_\_\_

12)   
 \_\_\_ + \_\_\_ = \_\_\_